

Name: _____ Date: _____ Number: _____

Everyday Math Unit 7 Review

1. Joe has 52 marbles. He gives 10 away. How many marbles does he have left?

Answer: _____ (units)

Number model: _____

2. Marie has 75 beads and gives her sister 20. How many beads does she have now?

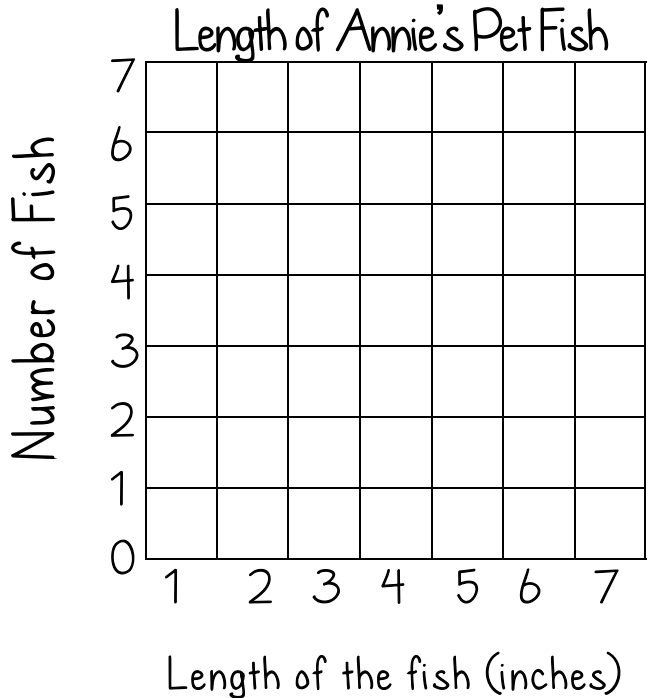
Answer: _____ (units)

Number model: _____

3. Read the table, complete the bar graph and answer the question:

Annie has 24 pet fish. Below is a table showing the different lengths of the fish. Read the information on the table and fill out the graph.

Length (in.)	Number
2	6
3	1
4	5
5	6
6	2
7	4



What was the most popular length of all Annie's Fish? _____ (units)

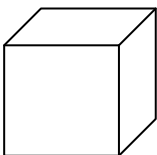

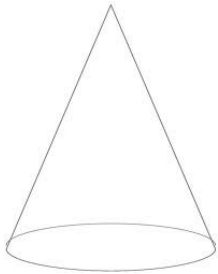
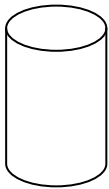
4. Complete the "What's My Rule" boxes:

Rule:	In	Out
+6	0	
	5	
	6	
	10	
	24	
		18

Rule:	In	Out
Double	4	
	7	
	10	
	50	
	100	
		50

5. Draw a line to the correct 3D Shape.

Bonus: Which shape is written but not shown? -----



Rectangular Prism

Cube

Cylinder

Sphere

Pyramid

Cone

6. For each set of numbers, find the mode (the most popular number) and the median (the middle number).

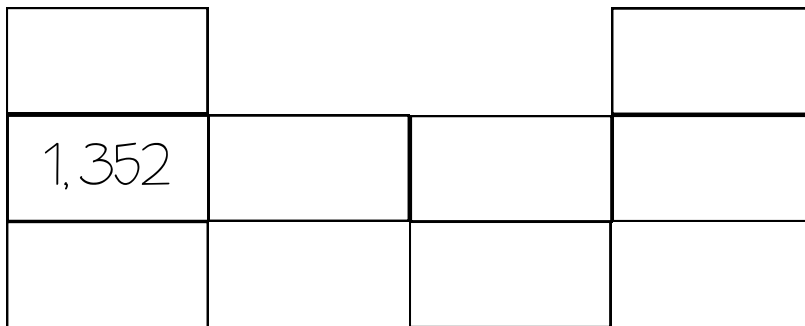
17, 21, 12, 12, 28, 15

51, 49, 40, 56, 49, 55, 60

Mode: _____ Median _____

Mode: _____ Median _____

7. Complete the Number Grid Puzzle:



8. Add the numbers:

$$18 + 8 + 10 = \underline{\hspace{2cm}}$$

$$24 + 11 + 5 = \underline{\hspace{2cm}}$$

$$7 + 14 + 3 = \underline{\hspace{2cm}}$$

9. Reflect on the Math Review:

The simplest math on this review for me, was: _____

The most difficult math on the review for me, was: _____

For tomorrow's math test, I will practice _____, _____ and _____.